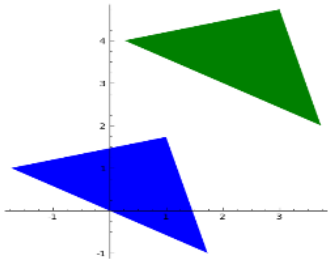


Identify the transformations using the the definitions from the table.



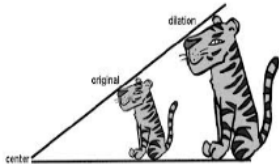
1. _____



2. _____



3. _____



4. _____



5. _____



6. _____



7. _____




8. _____



9. _____



10. _____




11. _____



12. _____



13. _____



14. _____